
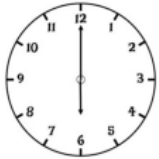


## Key Vocabulary:


- O' Clock
- Half Past
- Quarter Past
- Quarter To
- Minutes
- Hours
- Hands




6 o'clock



half past 9



9 o'clock



half past 12

# Year 2 Maths - Time

## Possible sentence stems

- There are \_\_\_\_\_ minutes in 1 hour.
- There are \_\_\_\_\_ minutes in quarter/half/three-quarters of an hour.
- There are \_\_\_\_\_ minutes in 1 hour and \_\_\_\_\_ minutes.
- There are \_\_\_\_\_ hours in a day.
- Each time on a clock happens \_\_\_\_\_ times every day.
- A new day starts at 12 \_\_\_\_\_
- The time shown is quarter past/to \_\_\_\_\_
- At quarter past/to \_\_\_\_\_, the minute hand is pointing to \_\_\_\_\_ and the hour hand is between the \_\_\_\_\_ and the \_\_\_\_\_

Order the times from shortest to longest.

half an hour

50 minutes

one hour

70 minutes

- What is the same and what is different about the times?

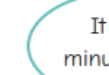


Kim, Ron and Mo are telling the time.



It is 10 minutes to 1

Kim



It is 10 minutes to 2



Ron



It is 10 minutes past 10

Mo

Who is correct?

What mistakes have the other children made?

