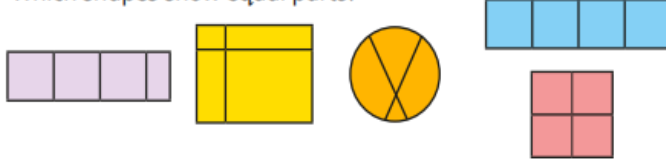


Key vocabulary

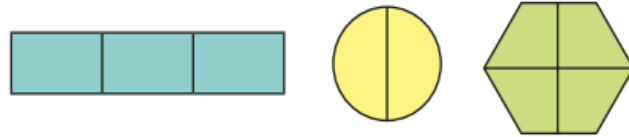
Year 2 - Fractions

- Parts
- Whole
- Equal/ Unequal
- Fraction
- Half
- Quarter
- Third
- Whole
- Three- quarters
- Unit fractions
- Non-unit fractions
- Equivalent fractions

Which shapes show equal parts?



Complete the sentence for each shape.



There are _____ equal parts.

How can you tell that they are equal parts?

Here is a tower made of red, yellow and green cubes.



How many different ways can you describe the parts?

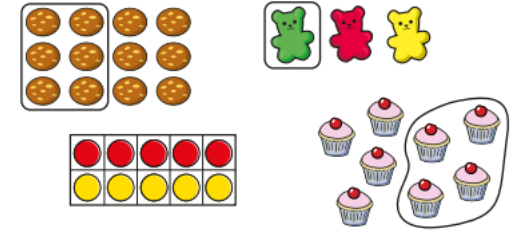
The _____ cubes are a small part of the whole.

The _____ cubes are a large part of the whole.

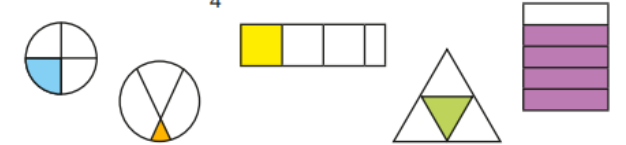
Build your own tower and describe the parts.



Which pictures show $\frac{1}{2}$?



Which shapes show $\frac{1}{4}$?



Which circle shows a third?



- There are _____ equal parts.
- I know the shape has been split into equal/unequal parts because ...
- If the _____ is the whole, _____ is part of the whole.
- If _____ is the whole, _____ is not part of the whole.

$\frac{1}{2}$



$\frac{1}{3}$



$\frac{1}{4}$

